

Mock Test Papers- Test2

Key stage 1

Mathematics

Paper 2: reasoning

First name	
Middle name	
Last name	

Total marks	
-------------	--



Ajay



Amy



Ben



kemi




Sam



Sita

Practice question



balls

1

two-digit number

greater than 20

even number



1 mark

2

60



1 mark

3 Match each label to the correct part of the date.

One is done for you.

date Sunday 20th December 2020

label day of the month day of the week year month

The diagram shows a date 'Sunday 20th December 2020' in rounded rectangular boxes. Below it are four rectangular boxes with labels: 'day of the month', 'day of the week', 'year', and 'month'. A line connects the '20th' box to the 'day of the month' box.

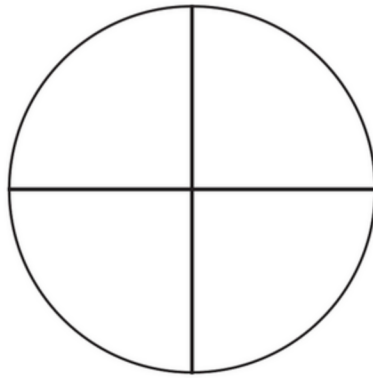
1 mark

4

A large empty rectangular box with a blue border, intended for the student to write their answer.

1 mark

5



1 mark

6

Put these numbers in order from largest to smallest.

One is done for you.

62

82

25

75

~~95~~

95

largest

smallest



1 mark

7 Sita has **12** t-shirts. She buys 2 **more**.

How many t- shirts does she have altogether?

t-shirts


1 mark

8 Match the description to the right answer.

The day before Monday	June
The day after Friday	Sunday
The month after May	Saturday
The month before April	March


1 mark

9

Ben has **10 pencils**.

Sam has **20 pencils**.

Ajay has **40 pencils**.

How many pencils do they have **altogether**?

pencils



1 mark

10 This number sentence equals 20

$$\boxed{1} + \boxed{1} \boxed{9} = \boxed{2} \boxed{0}$$

Now write a **different** number sentence that equals 20

Write **one digit** in each empty box.

$$\boxed{} + \boxed{1} \boxed{} = \boxed{2} \boxed{0}$$

1 mark

11 Draw a line from each shape to its name.



Rectangle



Circle



Square



Triangle



2 marks

12 Fill in the missing numbers.

30	35	40			
----	----	----	--	--	--



1 mark

13 Write the answer.

$$\boxed{15} - \boxed{5} = \boxed{}$$



1 mark

14 How much do the apples weigh?

 g

1 mark

15

Complete the table to show how many tens and ones are in each number.

One is done for you.

Number	Tens	Ones
65	6	5
98		
5		



1 mark

- 16** Draw hands on this clock to show the time **half past five**.



1 mark

17


What is the **difference** between the number of **books** and **bags**?



1 mark

18

Add up these coins in the purse to find the total amount.



1 mark


19 How **long** is the pencil in cm?

 cm

1 mark

20

How many blocks tall is the door?



1 mark


blocks

21 Fill in the missing numbers

2	4	6		10	
---	---	---	--	----	--

1 mark

22 10 children are eating plums. Each child eats 2 plums.



How many plums do they eat **altogether**?

--

 plums

1 mark

23 Sam has **3 green** presents

His friend gave **4 blue** presents.

How many **presents** are there **altogether**?



presents

1 mark

24 There are **30** people in a bus.

10 people get off.

10 people get on.




How many people are there in the bus **now**?

Show
your
working

people

2 marks

25 Complete this pattern.





1 mark

26 Sita has £1



teddy
45p



band
10p

She buys a teddy and a band.

How much change does Sita get from £1?

Show
your
working



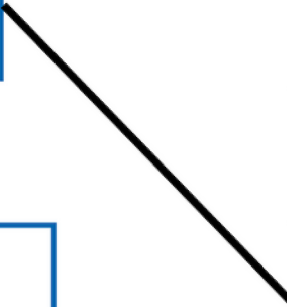
2 marks

p

27

Match up the number that comes next in each list.

30	32	34	36		16
10	20	30			36
5	10	15			40
4	8	12			20



2 marks

28

A class of children count vehicles as they pass the school.
This pictogram shows the results.

lorry



cars



buses



motorbikes



a. Which was the most common type of vehicle that passed the school
and how many passed the school?



2 marks

b. How many more lorries than buses passed the school?

29

write each word as a number.

Fifteen

Eleven

Twenty five

Fifty




1 mark

30

There are 10 carrots.

Ben eats half of the carrots. How many are left?



—



1 mark

End of test

Practice question	Look at the Balls. Count how many balls there are altogether .
Question 1	I am thinking of a two-digit number. It is greater than 20 . It is an even number. What number could I be thinking of?
Question 2	What number is 1 greater than 60?
Question 3	Match each label to the correct part of the date.
Question 4	Ben has 2 pencils. Amy has 4 more pencils than Ben. How many pencils does Amy have?
Question 5	Look at the picture of the circle. Shade half of the circle.

[BLANK PAGE]

Please do not write on this page.